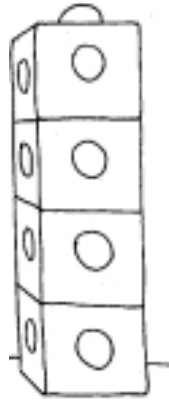
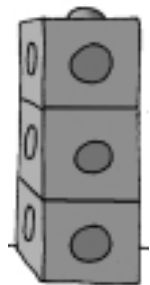


# Finding the Volume

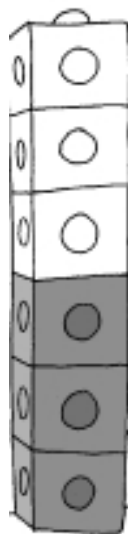
Volume is the amount of space needed by an object.  
The shapes below are made from centimeter cubes.  
What is the volume of each shape?



volume \_\_\_\_\_  $\text{cm}^3$



volume \_\_\_\_\_  $\text{cm}^3$



volume \_\_\_\_\_  $\text{cm}^3$